

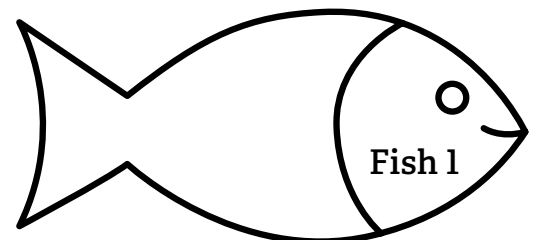
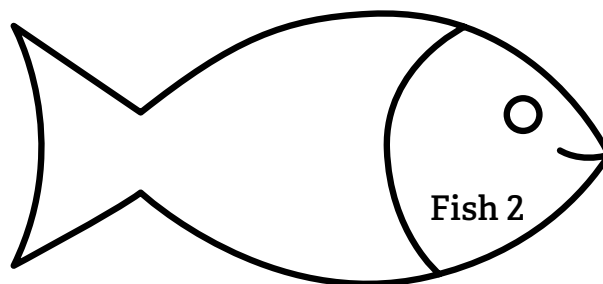
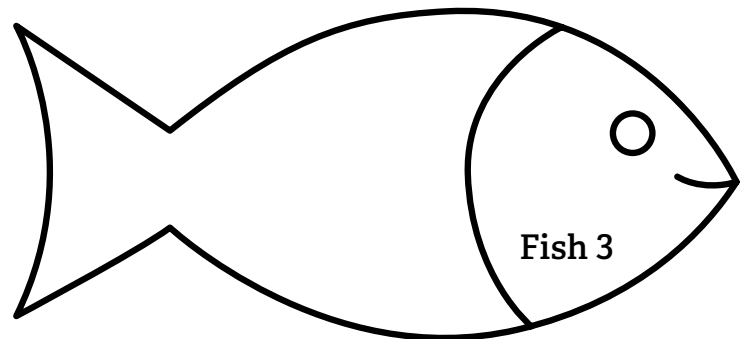
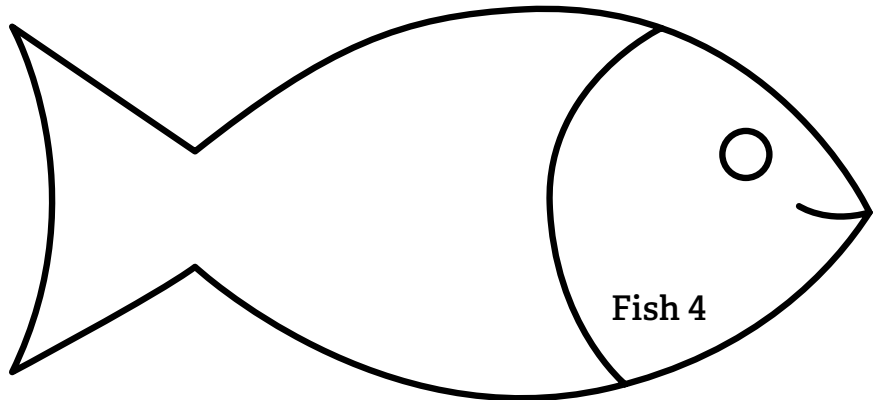
Lesson Plan 8 - Plastics in Marine Life - Activity Sheet 4

FISH ACTIVITY

Name: _____ Date: _____

Instructions: Draw and then write the number of microplastics for each fish in the boxes.

<p>Fish 4</p> <p>_____</p> <p>microplastics</p>
<p>Fish 3</p> <p>_____</p> <p>microplastics</p>
<p>Fish 2</p> <p>_____</p> <p>microplastics</p>
<p>Fish 1</p> <p>_____</p> <p>microplastics</p>



Which fish has the highest number of microplastics? _____